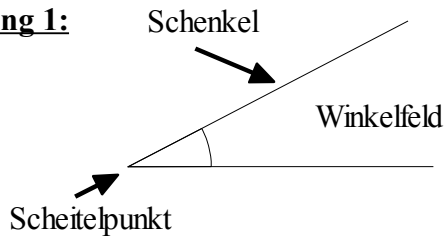


DREIECKE und WINKEL: Übungen

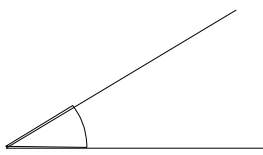
Übung 1:



Wie heißen diese Winkel?

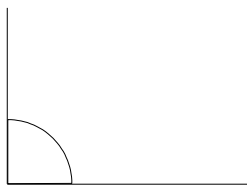
stumpfer Winkel - gestreckter Winkel - rechter Winkel
spitzer Winkel - überstumpfer Winkel - Vollwinkel

a)



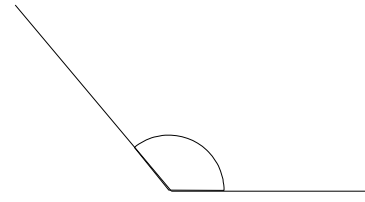
.....

b)



.....

c)



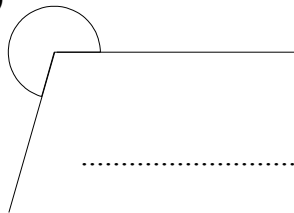
.....

d)




.....

e)



.....

f)



.....

Übung 2: Trage die Wörter an der richtigen Stelle ein.

**Hypotenuse - Ankathete - rechter Winkel - Gegenkathete - stumpfer Winkel -
 Basiswinkel - Grundseite - Schenkel - Eckpunkt**

Labels for Triangle 1:

- a)
- b)
- c)
- d)
- e)

Labels for Triangle 2:

- f)
- g)
- h)
- i)