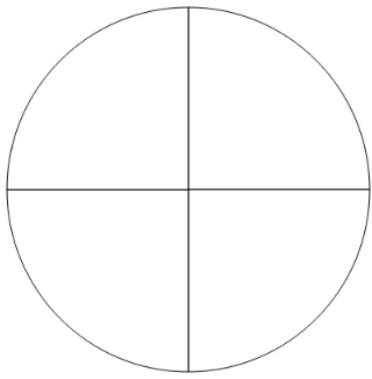
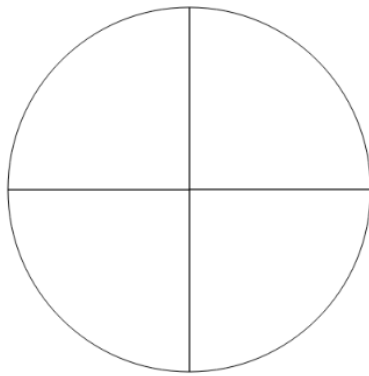


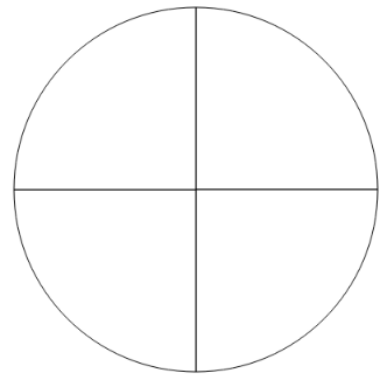
★ Colorier  $\frac{1}{4}$  de l'aire du disque.



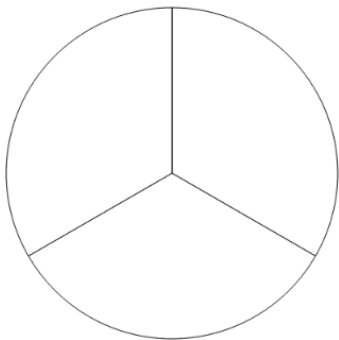
★ Colorier  $\frac{3}{4}$  de l'aire du disque.



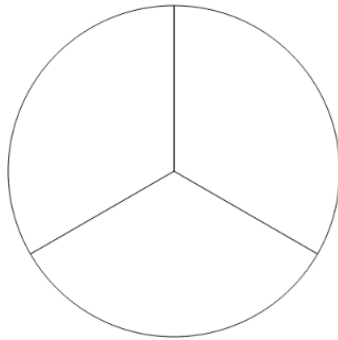
★ Colorier un-quart de l'aire du disque.



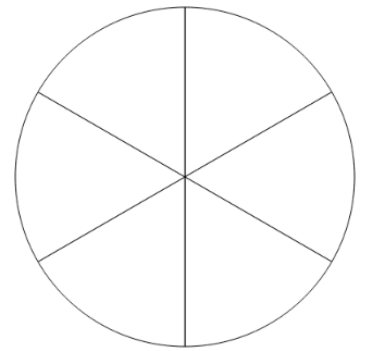
★ Colorier  $\frac{1}{3}$  de l'aire du disque.



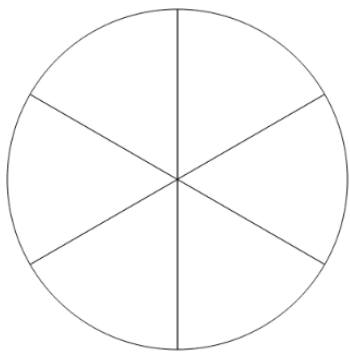
★ Colorier  $\frac{2}{3}$  de l'aire du disque.



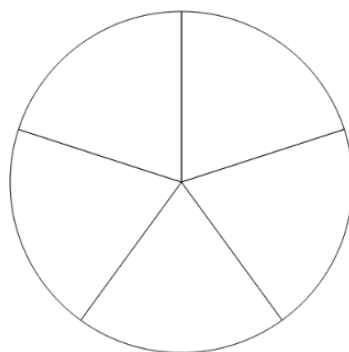
★ Colorier  $\frac{5}{6}$  de l'aire du disque.



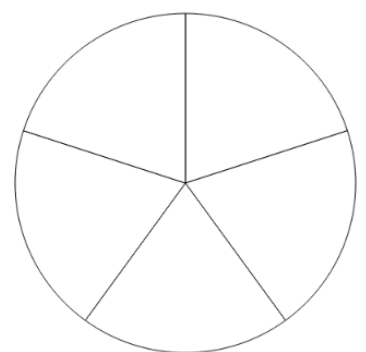
★ Colorier  $\frac{1}{6}$  de l'aire du disque.



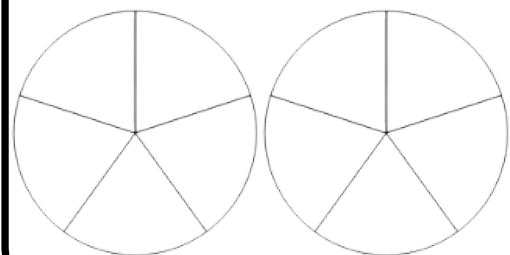
★ Colorier  $\frac{2}{5}$  de l'aire du disque.



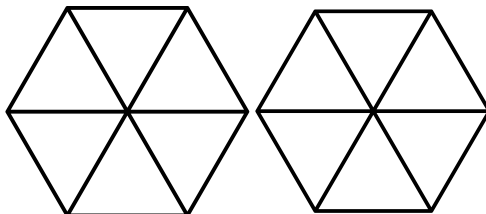
★ Colorier  $\frac{3}{5}$  de l'aire du disque.



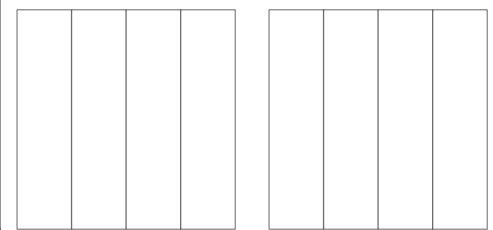
★ Colorier  $\frac{8}{5}$




★ Colorier  $\frac{10}{6}$




★ Colorier  $\frac{7}{4}$



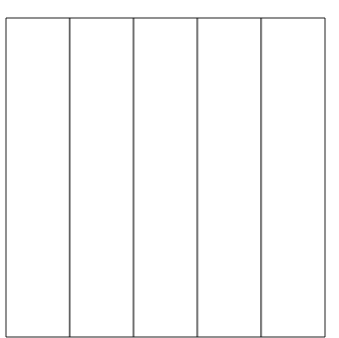
★ Colorier  $\frac{1}{4}$  de l'aire du rectangle.




★ Colorier  $\frac{3}{4}$  de l'aire du rectangle.



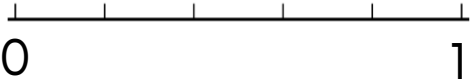
★ Colorier  $\frac{2}{4}$  de l'aire du rectangle.



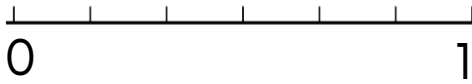
★ Colorier  $\frac{5}{8}$  de l'aire du disque.



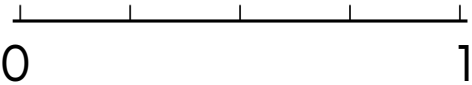
★ Colorier  $\frac{1}{5}$  de l'unité.




★ Colorier  $\frac{4}{6}$  de l'unité.



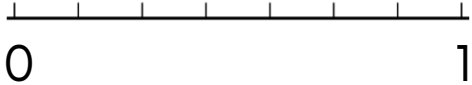
★ Colorier  $\frac{2}{4}$  de l'unité.



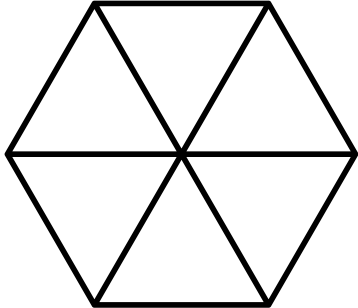
★ Colorier  $\frac{1}{3}$  de l'unité.



★ Colorier  $\frac{3}{7}$  de l'unité.




★ Colorier  $\frac{2}{6}$  de l'unité.



★ Colorier  $\frac{7}{10}$  de l'unité.



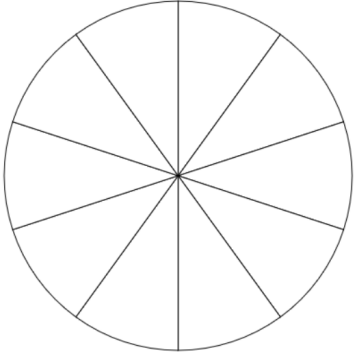
★ Colorier  $\frac{3}{10}$  de l'unité.



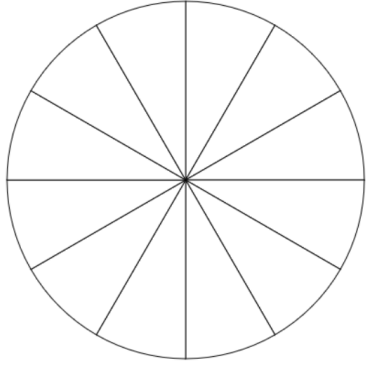
★★★ Colorier  $\frac{1}{2}$  de l'unité.



★★★ Colorier  $\frac{2}{5}$  de l'unité.



★★★ Colorier  $\frac{1}{6}$  de l'unité.



★★★ Colorier  $\frac{1}{4}$  de l'unité.



★★★ Colorier  $\frac{3}{4}$  de l'unité.



★★★ Colorier  $\frac{2}{3}$  de l'unité.



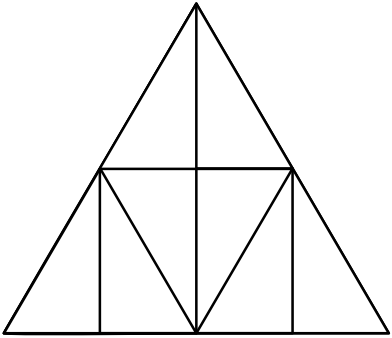
★★★ Colorier  $\frac{1}{2}$  de l'unité.



★★★ Colorier  $\frac{1}{4}$  de l'unité.



★★★ Colorier  $\frac{1}{4}$  de l'unité.




★★★ Colorier  $\frac{2}{3}$  de l'unité.



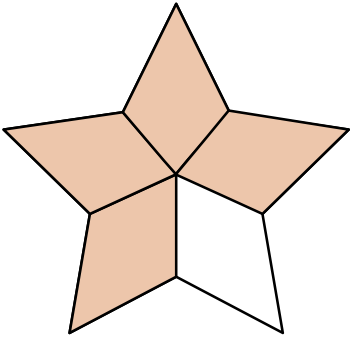
★★★ Colorier  $\frac{1}{5}$  de l'unité.



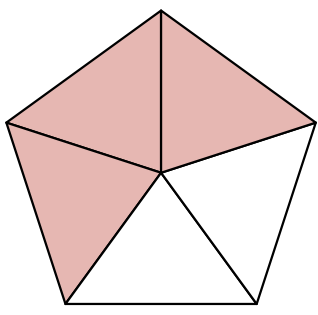
★★★ Colorier  $\frac{3}{5}$  de l'unité.



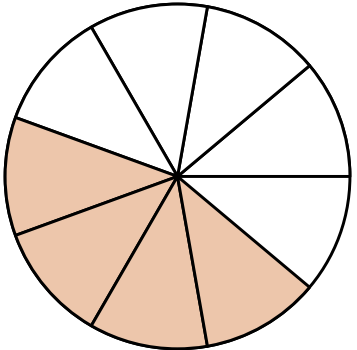
★ Quelle fraction de la surface est coloriée ?



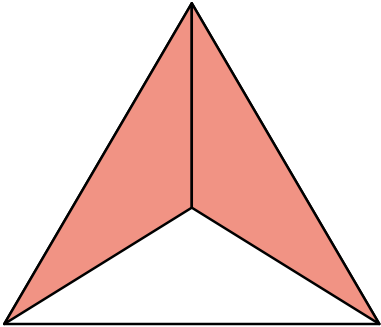
★ Quelle fraction de la surface est coloriée ?



★ Quelle fraction de la surface est coloriée ?



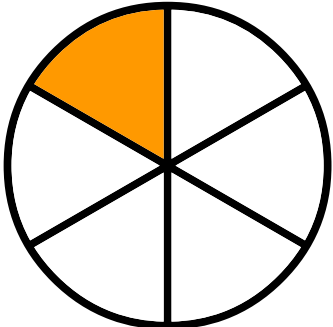
★ Quelle fraction de la surface est coloriée ?




★ Quelle fraction de la surface est coloriée ?




★ Quelle fraction de la surface est coloriée ?



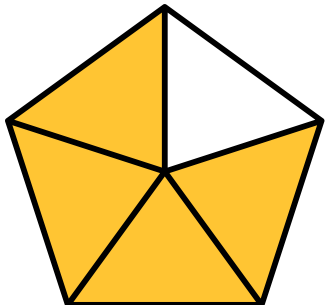
★ Quelle fraction de la surface est coloriée ?



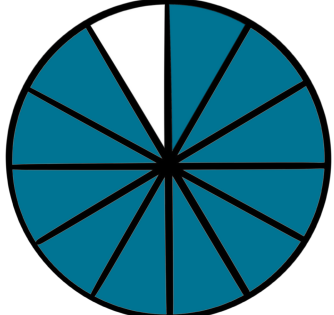
★ Quelle fraction de la surface est coloriée ?




★ Quelle fraction de la surface est coloriée ?




★ Quelle fraction de la surface est coloriée ?



★ Quelle fraction de la surface est coloriée ?




★ Quelle fraction de la surface est coloriée ?

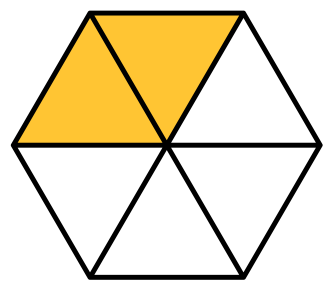




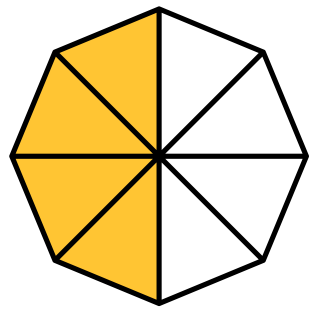
Quelle fraction de la surface est coloriée ?  
Plusieurs réponses possibles.




Quelle fraction de la surface est coloriée ?  
Plusieurs réponses possibles.




Quelle fraction de la surface est coloriée ?  
Plusieurs réponses possibles.



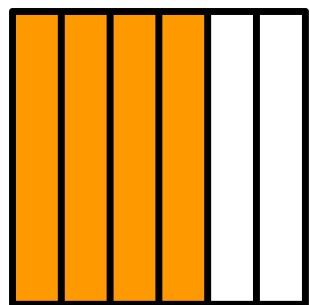
Quelle fraction de la surface est coloriée ?  
Plusieurs réponses possibles.




Quelle fraction de la surface est coloriée ?  
Plusieurs réponses possibles.




Quelle fraction de la surface est coloriée ?  
Plusieurs réponses possibles.



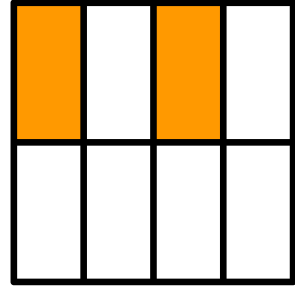
Quelle fraction de la surface est coloriée ?  
Plusieurs réponses possibles.



Quelle fraction de la surface est coloriée ?  
Plusieurs réponses possibles.



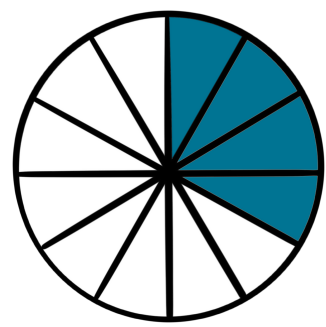
Quelle fraction de la surface est coloriée ?  
Plusieurs réponses possibles.



Quelle fraction de la surface est coloriée ?  
Plusieurs réponses possibles.



Quelle fraction de la surface est coloriée ?  
Plusieurs réponses possibles.



Quelle fraction de la surface est coloriée ?  
Plusieurs réponses possibles.

